



A Warm-up. Listen to your teacher.



24



12



B Write the time for each clock.

1.



4 o'clock

2.



o'clock

3.



o'clock

4.



o'clock

5.



o'clock

6.



o'clock

7.



o'clock

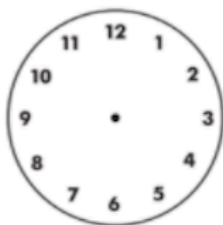
8.



o'clock

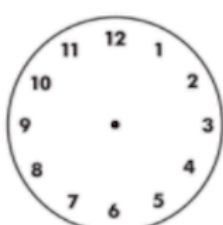
C Draw the hands on the clock.

1.



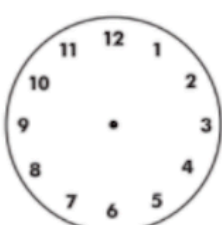
5 o'clock

2.



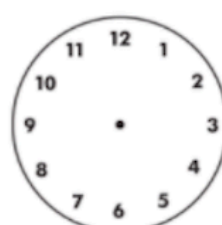
11 o'clock

3.



9 o'clock

4.



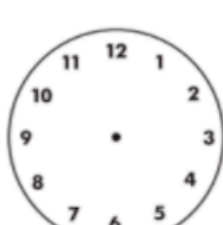
10 o'clock

5.



7 o'clock

6.




2 o'clock

7.



4 o'clock

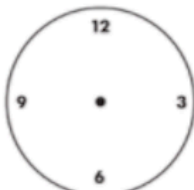
8.



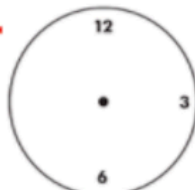
12 o'clock

D Write the missing numbers on the clocks.

1.



2.



3.

