


A 1. $5 + \square = 2 + 7$

2. Colour only 8 stars **blue**.



3. How many circles are in this picture?



4. Write 2 ways to make 16.

+ = 16


+ = 16

5. $4 + \square = 10$

6. How many corners has a rectangle?

7. $7 + 2 = \square + 7$

8. What time is it?



8

B 1.

1 2 3 4 5 6 7 8 9 10 11 12

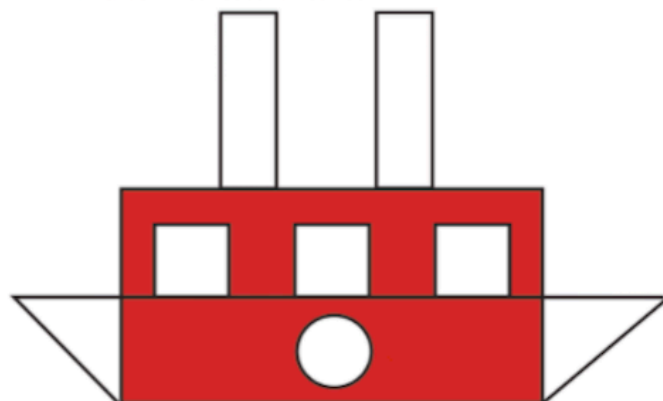
$6 + 5 = \square$

2. Circle the biggest number.

4 7 5 8 10 6

3. 2nd comes after _____.

4. Put an **X** on the shape that has no corners.



5. True or false? **✓** or **x**.

A semi-circle has 2 corners.

A circle has 4 corners.

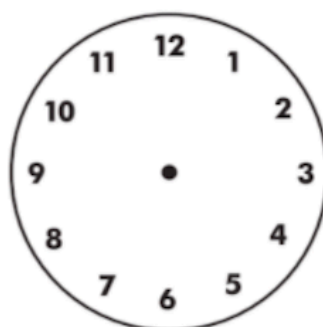
A triangle has 6 sides.

A square has 4 sides.

6. $10 + 0 = \square$

7. $\square + 9 = 17$

8. Show 7 o'clock.



8