

**A** 1.  $16 + \square = 19$

2.  $11 + \square = 11$

3. Which has more corners, a square or a semi-circle?

\_\_\_\_\_

4. What time is it?

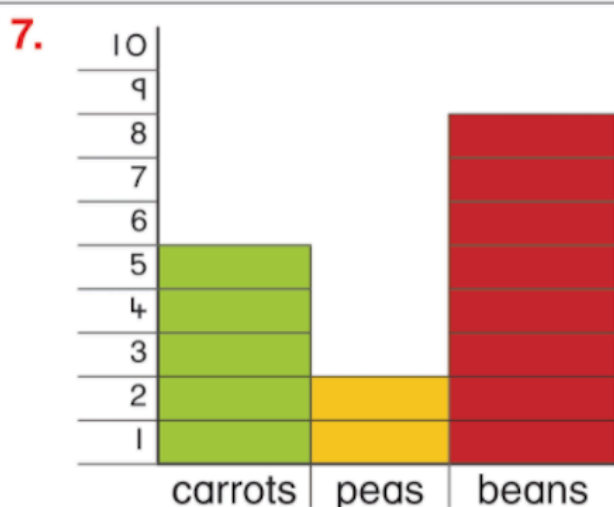
\_\_\_\_\_



5. There are  $\square$  less apples than oranges.



6.  $3 + 4 + 5 = \square$



How many children liked carrots?

8.  $2 + \square = 8$


8

**B** 1. Write the numbers which are 3 less.



2. Circle the smallest number.  
5    7    3    9    6

3.  $\square + 5 = 11$



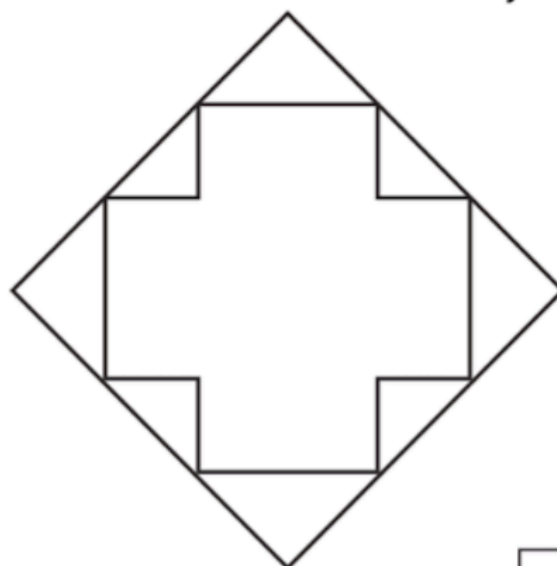
Who has the most marbles? \_\_\_\_\_

5. Fill in the missing numbers.



6.  $2 + 8 = \square + 5$

7. Colour the  $\blacktriangle$ . How many?



8.  $3 + 7 + 4 = \square$

8