
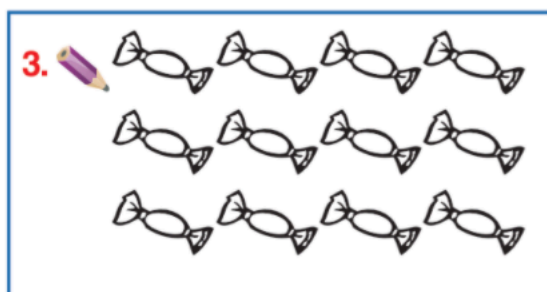

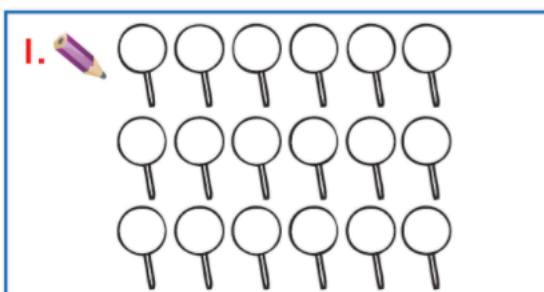


I will identify half of sets to 20 through number stories.



### A Pair work Colour half.



**B** 1. John had 14 marbles. He gave  $\frac{1}{2}$  to his friend Mark. How many did Mark get?

2. Lisa had 6 cakes. She gave  $\frac{1}{2}$  to Molly. How many cakes did Molly get?

3. Mum gave Sarah and Tom  $\frac{1}{2}$  a packet of sweets each. They each had 5 sweets. How many sweets were in the packet?

4. Peter shared 20 cards into 2 equal piles. How many were in each pile?

### C Match.

$\frac{1}{2}$ of 12	8
$\frac{1}{2}$ of 16	7
$\frac{1}{2}$ of 20	6
$\frac{1}{2}$ of 18	9
$\frac{1}{2}$ of 14	10

