



A Listen to your teacher.

A

I

C

K

E

W

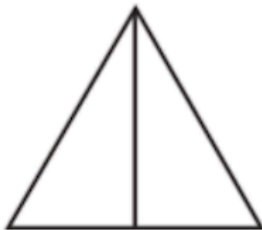
8

D

3

B

B Colour half ($\frac{1}{2}$) of these shapes.



C Draw a line to divide each shape in half ($\frac{1}{2}$). Use a ruler.

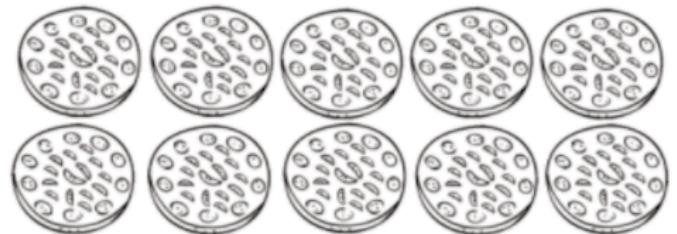


D Colour one half ($\frac{1}{2}$) of each set.


1.



2.



3.

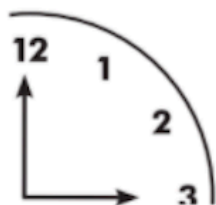


4.





A $\frac{1}{4}$ of each picture has been drawn. Complete the pictures.



B Pizza quarters.



1. (a) This pizza has been cut into parts.

(b) Each part is one quarter or $\frac{1}{4}$.

(c) Colour $\frac{1}{4}$ red like tomatoes.

(d) Colour $\frac{1}{4}$ yellow like cheese.

(e) Colour $\frac{1}{4}$ yellow and red.



2. (a) This pizza has been cut into parts.

(b) Colour in 3 parts.

(c) Write this as a fraction.

(d) How many quarters are left?

(e) Draw your favourite topping on the pizza.



C 1. Colour $\frac{1}{2}$ of the smiley faces.



There are faces.

$\frac{1}{2}$ of 6 is .

2. Colour $\frac{1}{4}$ of the faces.



There are faces.

$\frac{1}{4}$ of 8 is .

