

A

1. $73 - 28 = \square$

2. Draw a square.

3. Fill in the missing number.

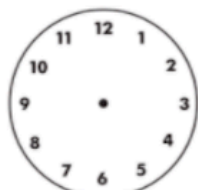
4, 8, 12, 16, , 24, 28

4. Colour the 3rd star **red**.



5. The first month of the year is .

6. Draw hands to show half past 3.




7. $2 + 7 + 8 = \square$

8. I had one €2 coin. I went shopping and bought a drink and crisps. **What change did I get?**



9. $138 = \square$ hundred \square tens
 \square units

10. Colour $\frac{1}{4}$ of 8.


B

1.
$$\begin{array}{r} 34 \\ 40 \\ + 25 \\ \hline \square \end{array}$$



2. This shape has square corners.

E


true



false



3. Show half past seven on the digital clock.



4. $(16 + 12) - 11 = \square$

5. Circle the correct answer.



square

triangle

oval

6. Write these weights in order starting with the lightest.

1kg

$\frac{1}{4}$ kg

$\frac{1}{2}$ kg

 , ,

7. $24 - 9 = \square$

8.
$$\begin{array}{r} 34 \\ - 19 \\ \hline \square \end{array}$$



9. I have 50c. How much more do I need to buy the kite?



€2.00

€

10. 9 tens + 2 units = \square

