

A

1. $4 + (5 + 1) = \square$

2. This shape is a _____.



3. This jug holds \square litre.



4. John had €2. He bought 2 ice-creams.

What was

his change? \square c



5.




How many legs on 3 chairs? \square


6. $84 - 61 = \square$

7. There are \square hours in a day.

8. Circle the shape with the greatest surface area.



9. Circle $\frac{3}{4}$ of the pencils.



10. $36 + 16 + 16 = \square$

10


B

1. Colour the house on the left to match.



2. $5l + 7l = \square l$

3. Draw the correct coins in the piggy bank to make €1.41.



4. Fill in the missing number.
14, 15, 16, \square , 18, 19

5. Draw 2 lines of symmetry.



6. $21 + 5 + \square = 27$

7. Jack bought 2 paint brushes.
How much did he spend? \square c



8. _____ is after spring.

9. Fill in the correct sign. $<$, $>$ or $=$
 $5 \square 12$

10. Show half past 12 in digital time.

 :

10